

**University of Mumbai's
Garware Institute of Career Education and Development
Bachelor of Interior Design (B.ID)**

AY - 2022-2023

Entrance Exam (1st Round)

Date: 27/06/2022

Time: 11.00 AM to 12.00 PM

Marks: 50

STUDENT NAME (First name – Last name) _____

SEAT NUMBER _____

EMAIL – ID _____

STUDENT MOBILE NUMBER (WhatsApp) _____

Q 1. If 1 feet = 30.48 cm then, how much is 12.5 feet? (Tick the correct option.) **(2)**

a) 3810 cm

b) 381 cm

c) 38.1 cm

d) 3.81 cm

Q 2. What is the perimeter of a room with length 32 feet, breadth 16 feet and height 10 feet? **(2)**

a) 96 sq. feet


b) 5120 sq. feet

c) 96 feet

d) 5120 feet

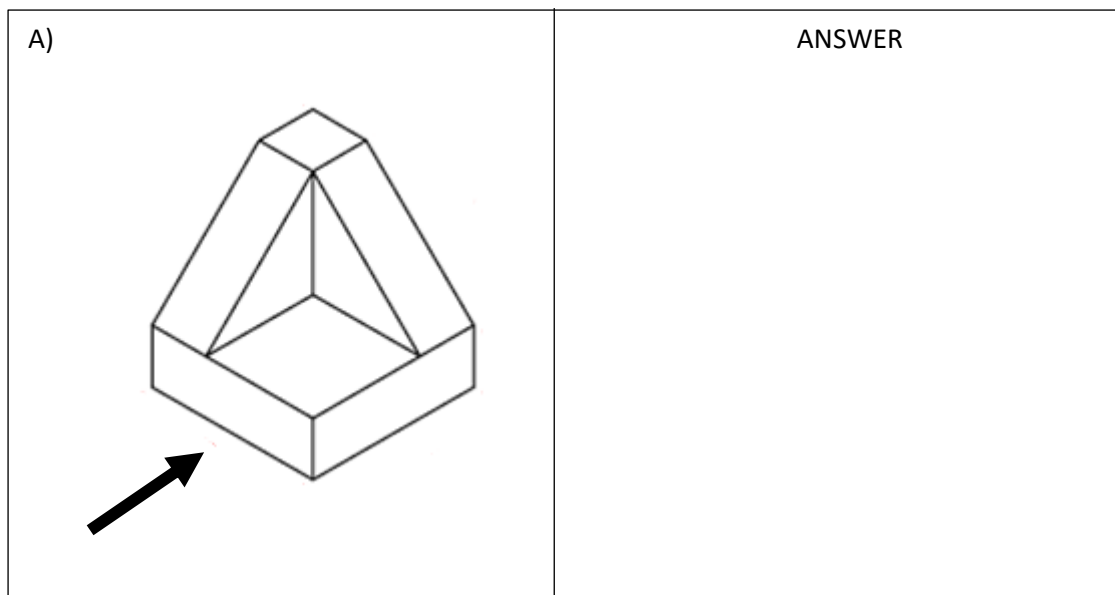
Q 3. Draw any interesting abstract composition with elements given below: **(10)**
Curved lines, triangles and circles.

Ans:



Q 4. Draw how the object looks from arrow side.

(6)



Q 5. Complete the picture with a proportionate adult human figure in standing position.

(5)



Q 6. Render the given piece of furniture in any medium.
Evaluation: neatness, colour selection, texture.

(15)



Q 7. Draw a dining table for four people in space of 14 cm x 8 cm and shade it in black and white.

(10)

**University of Mumbai's
Garware Institute of Career Education and Development
Bachelor of Interior Design (B.ID)**

AY - 2022-2023

Entrance Exam (1st Round)

Date: 27/06/2022

Time: 11.00 AM to 12.00 PM

Marks: 50

STUDENT NAME (First name – Last name) _____

SEAT NUMBER _____

EMAIL – ID _____

STUDENT MOBILE NUMBER (WhatsApp) _____

Q 1. If 1 inch = 2.54 cm then, how much is 3.5 inches? (Tick the correct option.) **(2)**

- | | |
|------------|-------------|
| a) 8.98 cm | b) 0.889 cm |
| c) 88.9 cm | d) 8.89 cm |

Q 2. What is the area of the room with sides 860 cm and 5.25 m and height 3 m? **(2)**

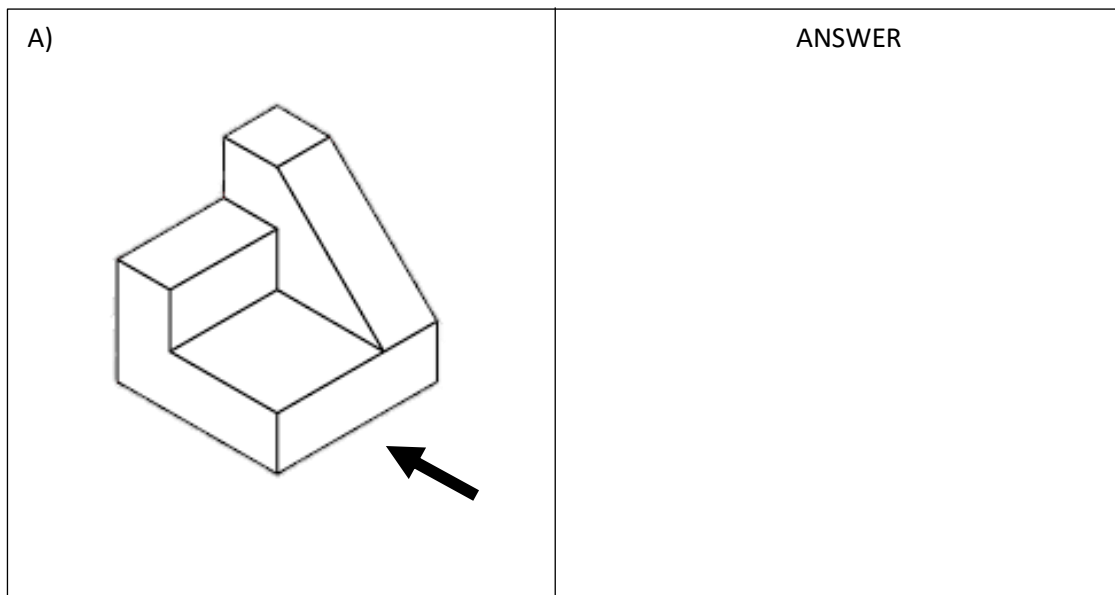
- | | |
|-----------------|----------------|
| a) 13,545 sq. m | b) 45.15 sq. m |
| c) 4515 sq. m | d) 15.75 sq. m |

Q 3. Write your first name in English in any font. Height of the lettering should be 2.5 cm. **(10)**
You may decorate and shade it in black and white.

Ans:


Q 4. Draw how the object looks from arrow side.

(6)



Q 5. Complete the picture with a proportionate adult human figure in standing position.

(5)



Q 6. Render the given piece of furniture in any medium.
Evaluation: neatness, colour selection, texture.

(15)



Q 7. Draw a sketch of a table and chair in space of 14 cm x 8 cm and shade it in black and white. **(10)**